

E.M "JOSÉ GABRIEL MACHADO"

4º Apostila

ATIVIDADES REFERENTES AOS DIAS:

19,20,22,23,26,27,28,29,30/04 e 03,04,05,06,07,10/05/2021

Prof. Marcelo Alves Cordeiro 1º Ano B

Aluno:



DIA DO ÍNDIO

COMPLETE COM A SÍLABA INICIAL DA FIGURA



___DIO



___NOA



___CHADO



___CHA



___NA



___BOR



___CA



___CAR



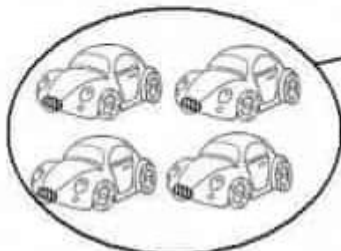

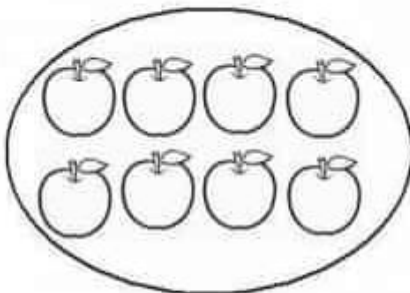


___CO

01 - Escreva a letra inicial dos desenhos abaixo:



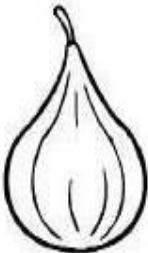




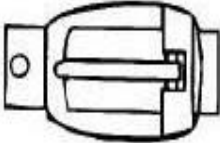


02 - Escreva o numeral correspondente:



CIRCULE AS PALAVRAS QUE INDICAM OS NOMES DOS DESENHOS.

| | | | | | |
|---|------------------------|---|----------------------|---|------------------------|
|  | BOFE FEIJÃO FADA |  | FIO FUBÁ FACÃO |  | FOCA FEIJÃO CAFÉ |
|  | CAFÉ UFA FAMA |  | FOI BAFO FADA |  | FADA FOGO FITA |

COMPLETE AS SÍLABAS QUE FALTAM NAS PALAVRAS.

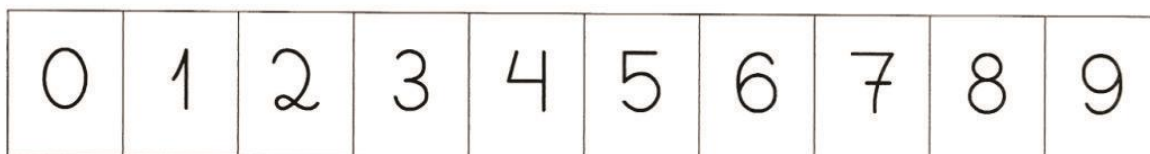
| | | | |
|---|---|--|---|
|  |  |  |  |
| __GO | CA__ | __ROL | __CA |
|  |  |  |  |
| __GO | __VELA | BI__ | __O |

NOME: _____

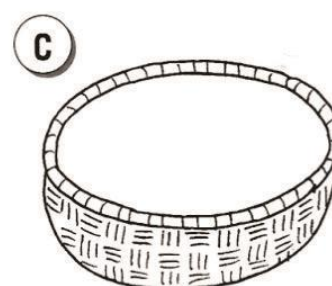
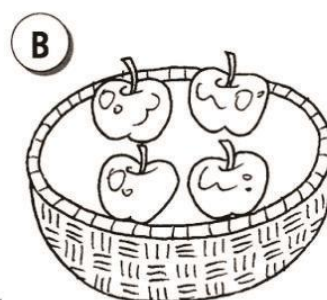

DATA: _____ PROFESSORA: _____

NÚMERO ZERO




1. OBSERVE A POSIÇÃO QUE O **ZERO** OCUPA NESTA SEQUÊNCIA NUMÉRICA E PINTE-O.



2. ANOTE QUANTAS FRUTAS HÁ EM CADA CESTA. USE NÚMEROS DE **ZERO A NOVE**.



3. DESENHE A QUANTIDADE SOLICITADA DE BOLAS.



CRUZADINHAS

INSTRUÇÕES:


Complete as sentenças para completar a cruzadinha:

01- Estado onde nasceu Tiradentes.

02- Primeiro nome de Tiradentes.

03- Nome do movimento revolucionário que ele participou.

04- Profissão que exercia, a qual originou seu apelido.



RESP: 01- Minas Gerais, 02- Joaquim,
03- Inconfidência, 04- Dentista

22/04/2021






Escola:






Data: Turma:






Aluno:

Jogando os dados

1. Calcule quantos pontos você levou em cada volta.

| | | | | | | |
|---|---|----------------------|--|--|---|----------------------|
|  | + | <input type="text"/> | |  | + | <input type="text"/> |
|  | | <input type="text"/> | |  | | <input type="text"/> |
| | | ----- | | | | ----- |
| | | <input type="text"/> |  | | | <input type="text"/> |

| | | | | | | |
|---|---|----------------------|---|--|---|----------------------|
|  | + | <input type="text"/> | |  | + | <input type="text"/> |
|  | | <input type="text"/> | |  | | <input type="text"/> |
| | | ----- | | | | ----- |
| | | <input type="text"/> |  | | | <input type="text"/> |

| | | | | | | |
|---|---|----------------------|---|--|---|----------------------|
|  | + | <input type="text"/> | |  | + | <input type="text"/> |
|  | | <input type="text"/> | |  | | <input type="text"/> |
| | | ----- | | | | ----- |
| | | <input type="text"/> |  | | | <input type="text"/> |

Escola: _____
Data: _____ Turma: _____ EducacaoeTransformacao.com.br
Aluno: _____

LEIA AS SÍLABAS ABAIXO, COMPLETE
O NOME DOS DESENHOS E ESCREVA.

FA

FE

FI

FO

FU



____SFORO



____TA



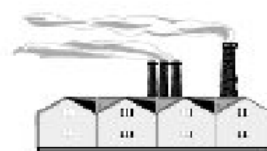
____MAÇA



____GO



____RRO




____BRICA

Escola: _____

Data: _____ Turma: _____

Aluno: _____

CONTE QUANTOS ELEMENTOS DA MESMA ESPÉCIE EXISTEM NESTA CENA



LUAS



COMETAS



FOGUETES



VULCÕES



BANDEIRAS



E.T.S



ASTRONAUTAS



ESTRELAS

Escola: _____
Data: _____ Turma: _____ EducacaoeTransformacao.com.br
Aluno: _____

ENCONTRE NO CAÇA-PALAVRAS ABAIXO AS SEGUINTE PALAVRAS:

| | | | | | | | | |
|---|---|---|---|---|---|---|---|---|
| C | G | P | G | W | F | I | C | A |
| F | O | T | O | R | O | Q | F | H |
| R | Q | L | B | L | C | F | Á | G |
| Q | W | N | S | F | A | I | B | F |
| W | T | S | H | W | B | A | I | W |
| M | A | B | A | F | A | C | A | J |
| T | P | A | F | O | C | A | K | G |
| N | W | F | I | G | O | R | V | T |
| M | W | O | W | F | I | T | A | Q |

FACA FOCA FIGO
FITA FOTO FICA

Escola: _____


Data: _____ Turma: _____

Aluno: _____



ESCRITA DE NUMERAIS

1) ESCREVA, NOS QUADROS ABAIXO, O NÚMERO DE ELEMENTOS DOS CONJUNTOS E A PALAVRA CORRESPONDENTE. JÁ COMECEI.



0

ZERO



□



□



□



□

ESCOLA: _____


TURMA: _____ DATA: ____ / ____ / ____

ALUNO: _____


FAMÍLIA SILÁBICA

GA GE GI GO GU


1- COMPLETE AS PALAVRAS COM O SOM INICIAL:




TO



LO



RAFA



RILA




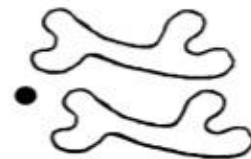




TO

Nome: _____

Data: ___ / ___ / ___

Matemática

● Liga os conjuntos que têm o mesmo número de elementos e assinala o número de elementos.



● Completa :


$$\begin{array}{c} _ + _ \\ _ + _ + _ \end{array}$$




$$\begin{array}{c} _ + _ \\ _ + _ + _ \\ _ + _ + _ + _ \end{array}$$

1. Complete as palavras com as sílabas **ga, go, gu, gão,** depois escreva abaixo:

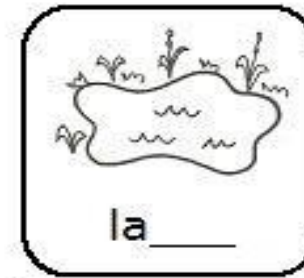


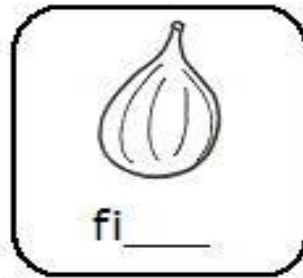














2. Ordene as palavras e forme frases.

gato
2

tem
3

grande.
5

bigode
4

O
1

goiaba
2

gostosa.
4

A
1

está
3

figo.
5

o
4

papagaio
2

O
1

bicou
3

Nome: _____ data: _____







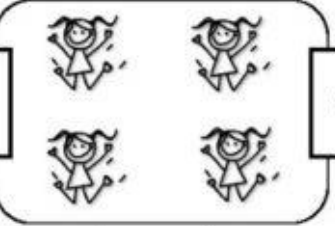

ADIÇÃO




@Atividades Suzano




CALCULE AS QUANTIDADES, ANOTE ABAIXO E DEPOIS DESENHE O RESULTADO:

| | | | | |
|---|---|---|---|---|
|  | + |  | = |  |
| <input data-bbox="355 757 467 824" type="text"/> | | <input data-bbox="738 757 850 824" type="text"/> | | <input data-bbox="1129 757 1241 824" type="text"/> |

| | | | | |
|--|---|--|---|--|
|  | + |  | = |  |
| <input data-bbox="360 1153 472 1220" type="text"/> | | <input data-bbox="743 1153 855 1220" type="text"/> | | <input data-bbox="1134 1153 1246 1220" type="text"/> |

| | | | | |
|---|---|---|---|---|
|  | + |  | = |  |
| <input data-bbox="363 1563 475 1630" type="text"/> | | <input data-bbox="751 1563 863 1630" type="text"/> | | <input data-bbox="1137 1563 1249 1630" type="text"/> |



VAMOS COMPLETAR AS PALAVRAS COM AS LETRAS QUE FALTAM?



T



L A

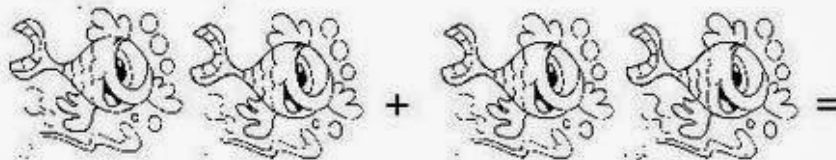



G A



R

QUANTO DÁ? RESPONDA E ESCREVA COM NÚMEROS!



NOME:

DATA: / /

DESENHE A QUANTIDADE DE BOLINHAS QUE SE PEDE:

UM

DOIS

TRÊS

QUATRO


CINCO

SEIS

SETE

NOVE


DEZ



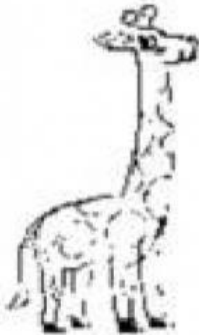
profrafaelak.blogspot.com

Escola: _____
Data: _____ Turma: _____ EducacaoeTransformacao.com.br
Aluno: _____

COMPLETE AS PALAVRAS COM AS SÍLABAS GA,
GE, GI, GO OU GU E LIGUE-AS FAZENDO A
CORRESPONDÊNCIA.



__ VETA



__ RAFA



__ LATINA



CO __ MELO

GELATINA

GAVIÃO

GAVETA

COGUMELO

GIRAFRA

GATA

GORILA

GALO



__ TA



__ LO



__ RILA



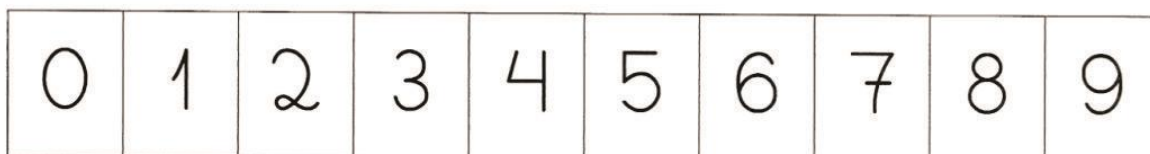
__ VIÃO

NOME: _____

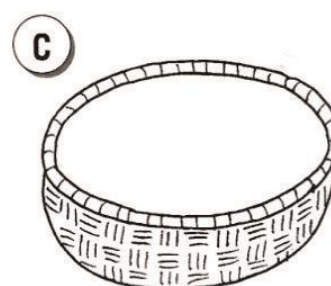


DATA: _____ PROFESSORA: _____

NÚMERO ZERO




1. OBSERVE A POSIÇÃO QUE O **ZERO** OCUPA NESTA SEQUÊNCIA NUMÉRICA E PINTE-O.



2. ANOTE QUANTAS FRUTAS HÁ EM CADA CESTA. USE NÚMEROS DE **ZERO A NOVE**.



3. DESENHE A QUANTIDADE SOLICITADA DE BOLAS.



JUNTE AS SÍLABAS DE ACORDO COM AS FIGURAS GEOMÉTRICAS E FORME PALAVRAS COM **G**.

GA GA DE LA

GO TO GU GO


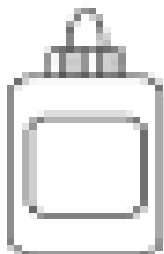



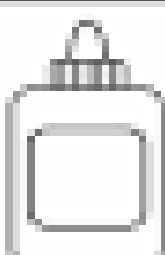

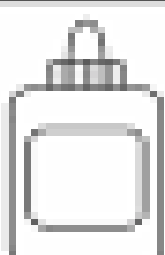






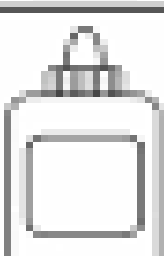


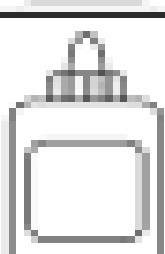


GU LA DO GA

Nome: _____

Data: _____ Turma: _____

Assinatura: _____

Escreva os números que faltam:

| | | | | |
|---|---|---|--|---|
|  |  |  |  |  |
|  |  |  |  |  |
|  |  |  |  |  |
|  |  |  |  |  |

LIGUE O DESENHO A SEU NOME, DEPOIS DE UM BELO COLORIDO AOS DESENHOS:



GALINHA



GATO




GOIABA



GIRAFA

AGORA PROCURE E Pinte APENAS AS LETRIHAS G:



Escola: _____

Data: _____ Turma: _____

Aluno: _____

$1+1=$

$1+3=$

$1+2=$

$1+7=$

$1+4=$

$1+8=$

$1+9=$

$1+10=$


$1+5=$

$1+6=$

Escreva as vogais que estão faltando para completar os nomes dos objetos de higiene.



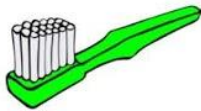
S _ _ B _ _ N _ _ T _ _



T _ _ SO _ _ R _ _



X _ _ MP _ _



_ _ SC _ _ V _ _



P _ _ NT _ _



NOME:

DATA: / /

LIGUE CADA NÚMERO AO SEU NOME:



DOIS



CINCO



ZERO

UM



SEIS



NOVE

TRÊS



QUATRO



OITO



SETE



Descubra palavras juntando os pedaços.



ja → ca _____
→ caré _____
→ buti _____

jo → ta _____
→ go _____
→ vem _____

je → ca _____
→ jum _____
→ ito _____

ju → ba _____
→ ra _____
→ mento _____

Pinte os retângulos que têm palavras começadas por **j**.

jibóia

pijama

jabuti

jovem


jaca

beijo

janela

jumento

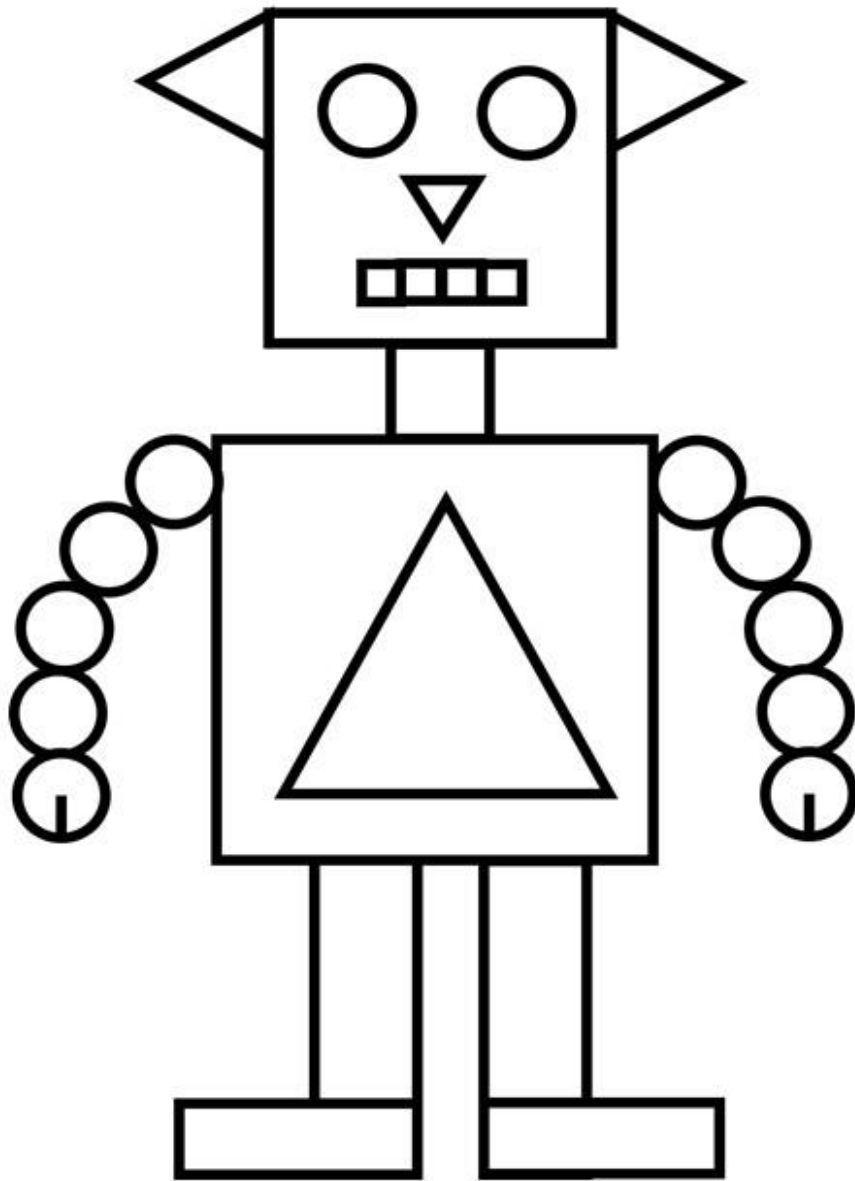
jacaré



NOME:

DATA: / /

PINTE CADA FORMA GEOMÉTRICA DE UMA COR DIFERENTE E REGISTRE A QUANTIDADE DE CADA UMA:



TRIÂNGULOS

RETÂNGULOS

QUADRADOS

CÍRCULOS

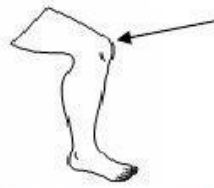
ATIVIDADES COM A LETRA "J"

1. Leia as sílabas abaixo, complete o nome dos desenhos e escreva.

JA JE JI JO JU



___ IZ



___ ELHO



___ DOCA




___ BUTICABA



___ QUETA



___ CARÉ



___ CA




___ PE



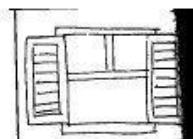
___ GADOR



___ MENTO



___ ANINHA



___ NELA

Escola: _____
Data: _____ Turma: _____ EducacaoeTransformacao.com.br
Aluno: _____

Complete a Sequência Numérica do 1 ao 31:


| DOM | SEG | TER | QUA | QUI | SEX | SAB |
|-----|-----|-----|-----|-----|-----|-----|
| 1 | | | | | | 7 |
| | | | 11 | | | |
| | | | | | 20 | |
| | | | | | | |
| | | | | | | |

VAMOS ESCREVER


COMPLETE OS NOMES DAS FIGURAS COM AS SÍLABAS QUE FALTAM. COPIE-OS EM SEGUIDA.




___NELA



LARAN___



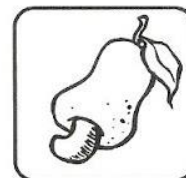
___ANINHA




___PE




AN___



CA___



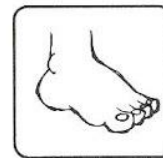


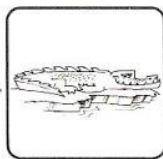


TI___LO



___CARÉ

LIGUE AS FIGURAS QUE TERMINAM COM O MESMO SOM. DEPOIS ESCREVA O NOME DELAS.



ESCOLA: _____

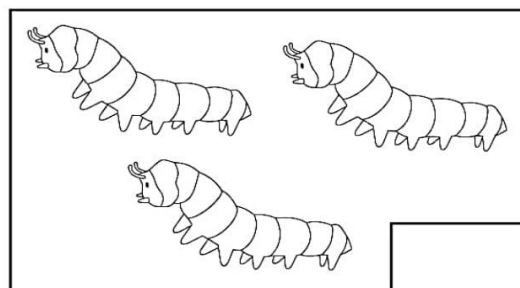

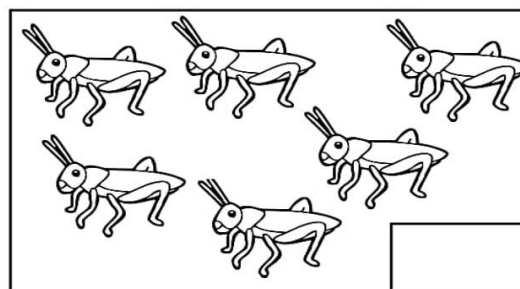
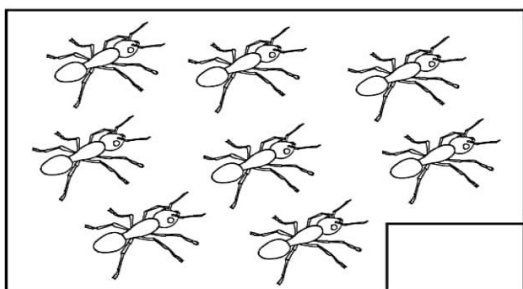
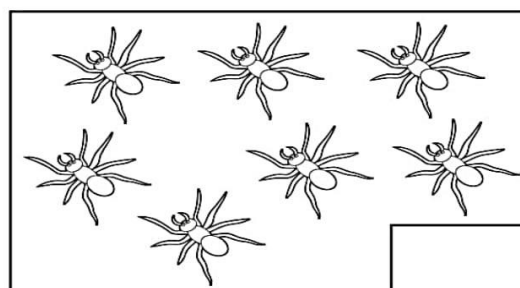

NOME: _____

DATA: ____/____/____



VAMOS CONTAR?

CONTE A QUANTIDADE DE INSETOS E ESCREVA O NÚMERO CORRESPONDENTE:



AGORA PINTE DE AMARELO O QUADRADINHO QUE TEM MAIS INSETOS E DE AZUL O QUE TEM MENOS INSETOS: