



PREFEITURA DA ESTÂNCIA TURÍSTICA DE
IBIÚNA
Por uma Ibiúna próspera. Investindo no presente, gerando o futuro.
SECRETARIA DE EDUCAÇÃO



Rua Raimundo Santiago, nº 27 - Centro
Telefone: (15) 3248-1292/e-mail: apoiopedagogicosmeibiuna@hotmail.com

ESCOLA MUNICIPAL "INÊS NUNES MAKIYAMA

NOME DO ALUNO: KAMILI TAYNA CARDOSO DE CAMARGO

PROFª LUCIANA BELLATO PEREZ

3º ANO B

PERÍODO DE: 07 a 19/06

DATA DE RETIRADA: 08/06

DATA DE DEVOLUÇÃO: 22/06

6ª apostila



EM CADA QUADRO COLE O QUE SE PEDE:

3 SACOS DE PIPOCA

5 BALÕES

Ídalis G. Barbosa

MARQUE COM UM X O PERSONAGEM QUE TEM
MAIS COCADAS NA BANDEJA.



ESCREVA ABAIXO O NÚMERO DE COCADAS DA
BANDEJA DE ROSINHA.


Ídalis G. Barbosa

www.gibarbosa1.blogspot.com

COM AJUDA DO ALFABETO MÓVEL MONTE OS NOMES DOS PERSONAGENS. CONTE O NÚMERO DE LETRAS E ESCREVA NO QUADRINHO.



Ídolo criativo



ENCONTRE PELA LETRA INICIAL O NOME DO INSTRUMENTO QUE PENADINHO ESTÁ TOCANDO.

BANDOLIM PANDEIRO

TRIÂNGULO

VIOLA

SANFONA

Ídolo criativo

VAMOS CONTAR E REGISTRAR?





Ilustração: *[illegible]*

QUANTOS PERSONAGENS VOCÊ VÊ EM CADA QUADRO?



QUANTOS SÃO TODOS OS PERSONAGENS JUNTOS?
PINTE A QUANTIDADE EXATA DE QUADRINHOS.

| | | | | | | | | | |
|--------------------------|--------------------------|--------------------------|--------------------------|--------------------------|--------------------------|--------------------------|--------------------------|--------------------------|--------------------------|
| <input type="checkbox"/> | <input type="checkbox"/> | <input type="checkbox"/> | <input type="checkbox"/> | <input type="checkbox"/> | <input type="checkbox"/> | <input type="checkbox"/> | <input type="checkbox"/> | <input type="checkbox"/> | <input type="checkbox"/> |
| <input type="checkbox"/> | <input type="checkbox"/> | <input type="checkbox"/> | <input type="checkbox"/> | <input type="checkbox"/> | <input type="checkbox"/> | <input type="checkbox"/> | <input type="checkbox"/> | <input type="checkbox"/> | <input type="checkbox"/> |

Ilustração: *[illegible]*


EM CADA QUADRO COLE O QUE SE PEDE:

3 SACOS DE PIPOCA

5 BALÕES

Julia Barbosa

MARQUE COM UM X O PERSONAGEM QUE TEM MAIS COCADAS NA BANDEJA.



ESCREVA ABAIXO O NÚMERO DE COCADAS DA BANDEJA DE ROSINHA.

Julia Barbosa

www.gjbarbosa1.blogspot.com



CONTE E REGISTRE NOS CÍRCULOS O NÚMERO DE BANDEIROLAS QUE APARECEM EM CADA CENA.



AJUDE O CHICO BENTO A COLOCAR O RABO NO BURRO.



Chico Bento

Chico Bento




ANEXO PUZZLE



COLORIR, RECORTAR E COLAR




Índice criativo




MARQUE COM UM X A FOGUEIRA MENOR EM CADA QUADRO.














SOME OS PONTOS DOS DADOS EM CADA JOGADA E ESCREVA O NÚMERO DO RESULTADO.

A  +  = 
cinco um

B  +  = 
quatro três

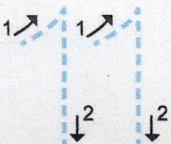



C  +  = 
seis quatro

D  +  = 
três dois

E  +  = 
quatro quatro




Resposta: B-7, C-10, D-5, E-8.




COMPLETE O NÚMERO ONZE.


11    






VAMOS SUBTRAIR? OBSERVE AS IMAGENS E ESCREVA O RESULTADO NO ESPAÇO EM BRANCO.

A  -  = 

B  -  = 

C  -  = 

D  -  = 

Respostas: A-3, B-8, C-4, D-0.

COMPLETE O NÚMERO DOZE.

12    



PARA RESOLVER CADA SOMA, SIGA O MODELO ABAIXO.

$8 + 5 + 3 =$

$$\begin{array}{r} 8 \\ 5 \\ + 3 \\ \hline 16 \end{array}$$

=

A $2 + 2 + 4 =$

$$\begin{array}{r} 2 \\ 2 \\ + 4 \\ \hline \end{array}$$

=

B $6 + 4 + 3 =$

$$\begin{array}{r} 6 \\ 4 \\ + 3 \\ \hline \end{array}$$

=


Resposta: A-8; B-13.

COMPLETE O NÚMERO TREZE.

13
 13 13 13



SOME E SUBTRAIA PINTANDO CADA PARTE COM A COR DO RESULTADO.



1 Verde

3 Azul

9 Rosa

8 Roxo

4 Laranja

12 Vermelho

COMPLETE O NÚMERO CATORZE.



3- HAVIA 2 PEIXINHOS NO AQUÁRIO, ALICE COLOCOU MAIS 5. QUANTOS PEIXINHOS FICARAM NO AQUÁRIO?



$$\square + \square = \square$$

4- MARIANA TINHA 6 MAÇÃS, COMEU 4. QUANTAS RESTAM?



4- RESOLVA AS OPERAÇÕES

$$\begin{array}{r} +1 \\ 2 \\ \hline \end{array}$$

$$\begin{array}{r} +2 \\ 2 \\ \hline \end{array}$$

$$\begin{array}{r} +3 \\ 4 \\ \hline \end{array}$$

$$\begin{array}{r} +6 \\ 2 \\ \hline \end{array}$$

$$\begin{array}{r} +7 \\ 2 \\ \hline \end{array}$$

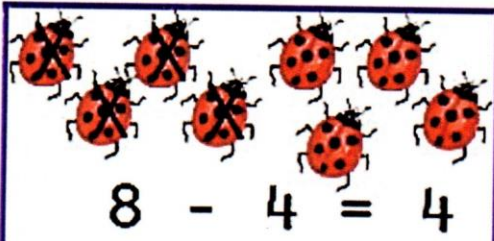
$$\begin{array}{r} 7 \\ -4 \\ \hline \end{array}$$

$$\begin{array}{r} 5 \\ -3 \\ \hline \end{array}$$

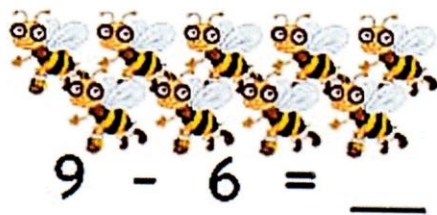
$$\begin{array}{r} 4 \\ -1 \\ \hline \end{array}$$

$$\begin{array}{r} 6 \\ -2 \\ \hline \end{array}$$

$$\begin{array}{r} 9 \\ -1 \\ \hline \end{array}$$



$$8 - 4 = 4$$



$$9 - 6 = \underline{\quad}$$



$$7 - 5 = \underline{\quad}$$



$$10 - 3 = \underline{\quad}$$



$$9 - 3 = \underline{\quad}$$




$$4 - 1 = \underline{\quad}$$



$$6 - 3 = \underline{\quad}$$



$$7 - 5 = \underline{\quad}$$



$$7 - 2 = \underline{\quad}$$



$$7 - 4 = \underline{\quad}$$



$$5 - 4 = \underline{\quad}$$



$$8 - 6 = \underline{\quad}$$

