



Prefeitura da Estância Turística de

IBIUNA



E.M “JOSÉ GABRIEL MACHADO”
E.M “JOAQUIM MACHADO DE OLIVEIRA”

2º ANO A

PROFESSORA:

IVANILDE ALVES .



APOSTILA DE ATIVIDADES REMOTAS N° 7

PERIODO DE: 21/06 A 02/07

NOME:

Referente à 21,22,23,24,25,28,29,30/06,01 E 02/07

ESCOLA _____


NOME: _____

DATA: ____/____/____



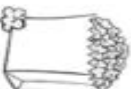
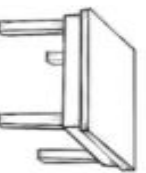
www.amorensina.com.br

CONTANDO E COMPLETANDO



- QUANTAS CRIANÇAS?

- QUANTOS CASAIS?



- CIRCULE UMA DEZENA DE BANDEIROLAS.

NOME:

NOME _____


DATA ____ / ____ / ____.



ATIVIDADE AVALIATIVA

LINGUAGEM

1. PINTE A CENA E OBSERVE A PALAVRA EM DESTAQUE NA FRASE.



CHICO BENTO APAGOU A FOGUEIRA.

NA PALAVRA FOGUEIRA APARECEM AS VOGAIS...

() A-O-U

() E-I-U-A

() E-A-I



NOME:

VAMOS RESOLVER AS ADIÇÕES:



@atividadespedagogicassuzano

Festa Junina

JUNINA

Vamos Calcular?

1)
$$\begin{array}{r} 57 \\ +20 \\ \hline \end{array}$$

2)
$$\begin{array}{r} 67 \\ +31 \\ \hline \end{array}$$

3)
$$\begin{array}{r} 64 \\ +10 \\ \hline \end{array}$$

4)
$$\begin{array}{r} 37 \\ +52 \\ \hline \end{array}$$

5)
$$\begin{array}{r} 21 \\ +63 \\ \hline \end{array}$$

6)
$$\begin{array}{r} 25 \\ +43 \\ \hline \end{array}$$

7)
$$\begin{array}{r} 45 \\ +51 \\ \hline \end{array}$$

8)
$$\begin{array}{r} 77 \\ +22 \\ \hline \end{array}$$

9)
$$\begin{array}{r} 21 \\ +56 \\ \hline \end{array}$$


10)
$$\begin{array}{r} 12 \\ +84 \\ \hline \end{array}$$

11)
$$\begin{array}{r} 32 \\ +36 \\ \hline \end{array}$$

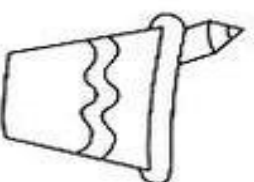
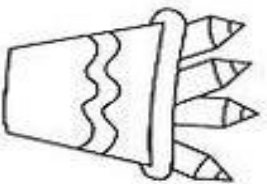
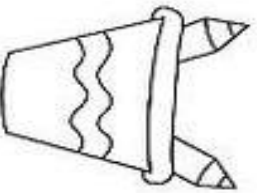
12)
$$\begin{array}{r} 27 \\ +71 \\ \hline \end{array}$$



NOME: _____

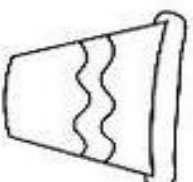
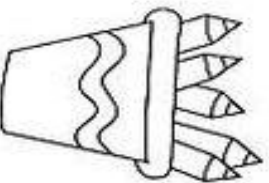
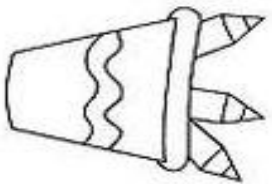


1) CONTE OS LÁPIS DE CADA LATA E ESCREVA A QUANTIDADE EM NUMERAIS E EM PALAVRAS. VEJA! JÁ COMECEI.



2

DOIS

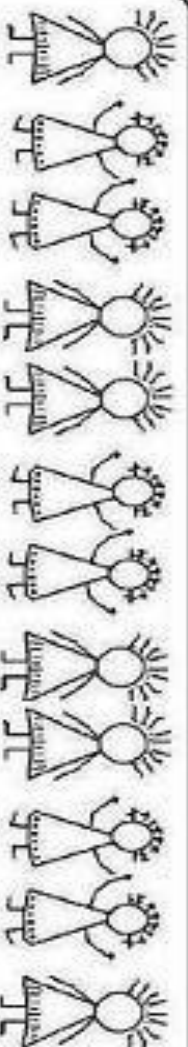


2) AGORA, RESPONDA CONSULTANDO AS LATAS ACIMA:

A) SE EU COLOCAR MAIS 2 LÁPIS NA TERCEIRA LATA, QUANTOS LÁPIS VÃO FICAR?

B) SE EU TIRAR UM LÁPIS DA SEGUNDA LATA, QUANTOS LÁPIS VÃO FICAR?



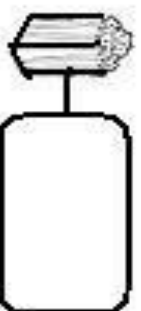
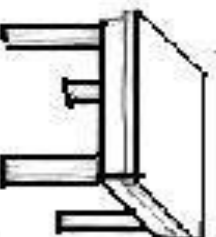
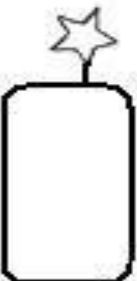

NOME:



Mistura de Alegria

MATEMÁTICA JUNINA

Observe a figura e escreva a quantidade:



NOME:

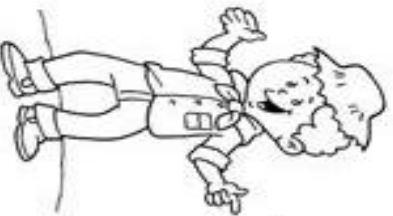
CIRCULE OS NOMES DAS FIGURAS CORRESPONDENTES



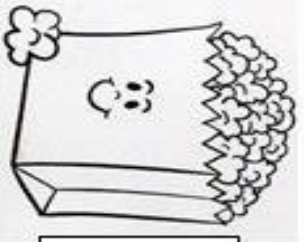
CIRCULE A PALAVRA CORRETA:



- BANDEIRINHA
- FORMINHA
- PANELINHA



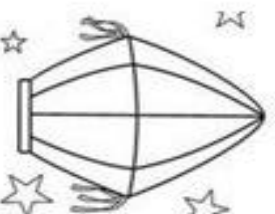
- MELANCIA
- CAPIPIRA
- LATARIA




- MAROCCA
- PIPOCA
- PAÇOCA



- FOLHA
- MILHO
- VELHA



- JOÃO
- BALÃO
- FEIJÃO



- MARCADA
- BARRACA
- LARGADA




- MOREIRA
- FOGUEIRA
- TINTEIRO

NOME:

Pinte de acordo com a legenda:

RESOLVA AS ADIÇÕES E PINTE DE ACORDO COM OS
RESULTADOS ABAIXO:



Atividades Suzano

- | | | | |
|-------------|-----------|-------------|-----------|
| 5= VERMELHO | 7= MARRON | 9= LARANJA | 11= VERDE |
| 6= VERDE | 8= AZUL | 10= AMARELO | 12= ROSA |